

Prénom :

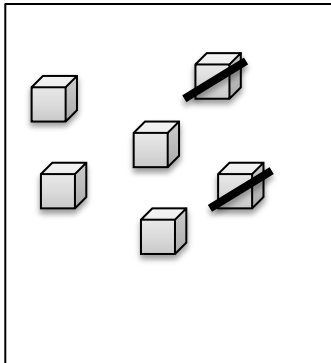
Date :

Premières soustractions

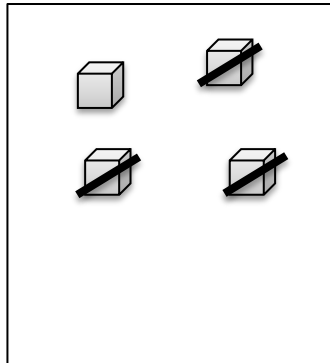
1

Calcul

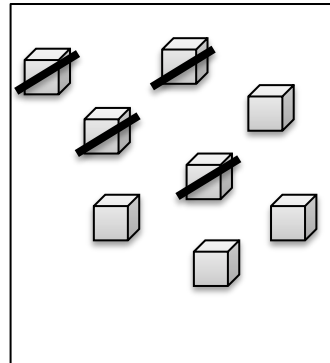
1.  **Ecris** l'écriture mathématique correspondant aux dessins :



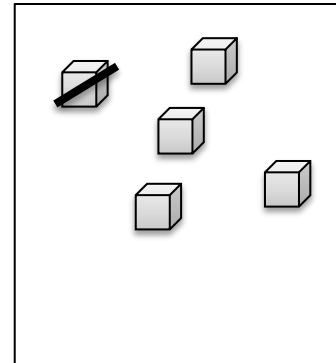
..... - =



..... - =

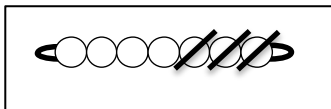


..... - =

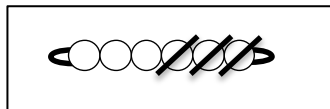


..... - =

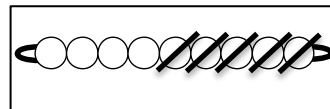
2.  **Ecris** le résultat des soustractions de perles :



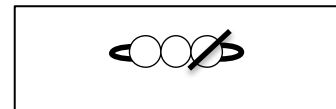
7 - 3 =



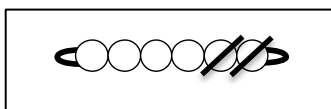
6 - 3 =



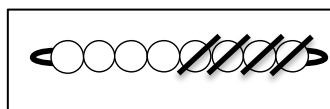
9 - 4 =



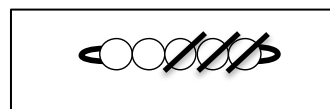
3 - 2 =



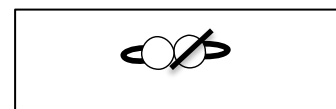
6 - 2 =



8 - 4 =

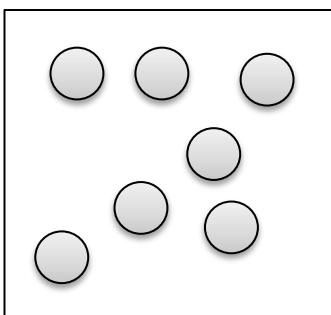


5 - 2 =

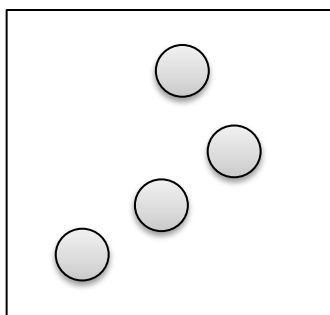


2 - 1 =

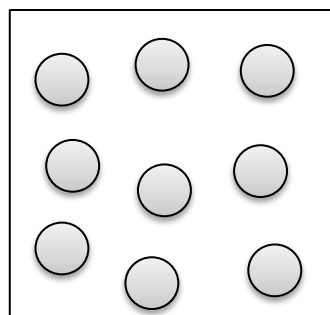
3.  **Barre** les jetons nécessaires.



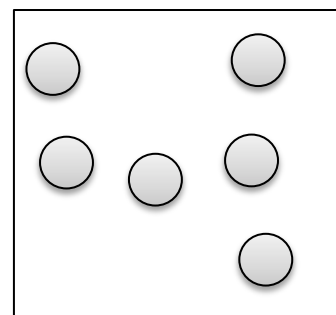
7 - 2 = 5



4 - 1 = 3



9 - 4 = 5



6 - 3 = 3


Prénom :

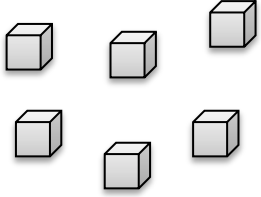
Date :

Premières soustractions

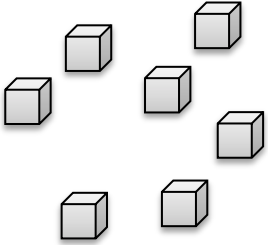
2

Calcul

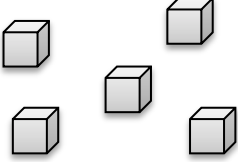
1.  **Calcule** en barrant si nécessaire :



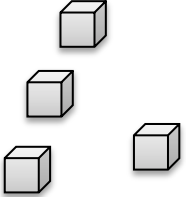
$6 - 2 = \dots$



$7 - 5 = \dots$




$5 - 4 = \dots$




$4 - 2 = \dots$


2.  **Calcule** en barrant les perles si nécessaire :




$9 - 2 = \dots$




$6 - 1 = \dots$




$4 - 3 = \dots$




$3 - 1 = \dots$




$5 - 2 = \dots$



$7 - 4 = \dots$



$8 - 6 = \dots$



$6 - 5 = \dots$

3.  **Calcule** en dessinant les jetons si nécessaires

$5 - 1 = \dots$

$4 - 2 = \dots$

$8 - 3 = \dots$

$7 - 3 = \dots$